

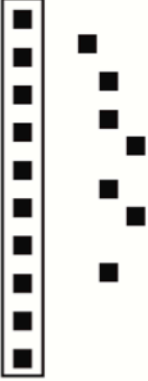











Name: \_\_\_\_\_













# Counting Tens and Ones

Directions: Count the tens and ones and write the number each group makes.

1. 	<table border="1"><thead><tr><th>tens</th><th>ones</th></tr></thead><tbody><tr><td> </td><td> </td></tr></tbody></table> _____	tens	ones		
tens	ones				
2. 	<table border="1"><thead><tr><th>tens</th><th>ones</th></tr></thead><tbody><tr><td> </td><td> </td></tr></tbody></table> _____	tens	ones		
tens	ones				
3. 	<table border="1"><thead><tr><th>tens</th><th>ones</th></tr></thead><tbody><tr><td> </td><td> </td></tr></tbody></table> _____	tens	ones		
tens	ones				
4. 	<table border="1"><thead><tr><th>tens</th><th>ones</th></tr></thead><tbody><tr><td> </td><td> </td></tr></tbody></table> _____	tens	ones		
tens	ones				
5. 	<table border="1"><thead><tr><th>tens</th><th>ones</th></tr></thead><tbody><tr><td> </td><td> </td></tr></tbody></table> _____	tens	ones		
tens	ones				
6. 	<table border="1"><thead><tr><th>tens</th><th>ones</th></tr></thead><tbody><tr><td> </td><td> </td></tr></tbody></table> _____	tens	ones		
tens	ones				
7. 	<table border="1"><thead><tr><th>tens</th><th>ones</th></tr></thead><tbody><tr><td> </td><td> </td></tr></tbody></table> _____	tens	ones		
tens	ones				
8. 	<table border="1"><thead><tr><th>tens</th><th>ones</th></tr></thead><tbody><tr><td> </td><td> </td></tr></tbody></table> _____	tens	ones		
tens	ones				
9. 	<table border="1"><thead><tr><th>tens</th><th>ones</th></tr></thead><tbody><tr><td> </td><td> </td></tr></tbody></table> _____	tens	ones		
tens	ones				
10. 	<table border="1"><thead><tr><th>tens</th><th>ones</th></tr></thead><tbody><tr><td> </td><td> </td></tr></tbody></table> _____	tens	ones		
tens	ones				
11. 	<table border="1"><thead><tr><th>tens</th><th>ones</th></tr></thead><tbody><tr><td> </td><td> </td></tr></tbody></table> _____	tens	ones		
tens	ones				
12. 	<table border="1"><thead><tr><th>tens</th><th>ones</th></tr></thead><tbody><tr><td> </td><td> </td></tr></tbody></table> _____	tens	ones		
tens	ones				

# Counting Tens and Ones

## Answer Key

1. 	<table border="1"><thead><tr><th>tens</th><th>ones</th></tr></thead><tbody><tr><td>2</td><td>0</td></tr></tbody></table> <u>20</u>	tens	ones	2	0	2. 	<table border="1"><thead><tr><th>tens</th><th>ones</th></tr></thead><tbody><tr><td>2</td><td>1</td></tr></tbody></table> <u>21</u>	tens	ones	2	1	3. 	<table border="1"><thead><tr><th>tens</th><th>ones</th></tr></thead><tbody><tr><td>1</td><td>7</td></tr></tbody></table> <u>17</u>	tens	ones	1	7
tens	ones																
2	0																
tens	ones																
2	1																
tens	ones																
1	7																
4. 	<table border="1"><thead><tr><th>tens</th><th>ones</th></tr></thead><tbody><tr><td>1</td><td>5</td></tr></tbody></table> <u>15</u>	tens	ones	1	5	5. 	<table border="1"><thead><tr><th>tens</th><th>ones</th></tr></thead><tbody><tr><td>2</td><td>2</td></tr></tbody></table> <u>22</u>	tens	ones	2	2	6. 	<table border="1"><thead><tr><th>tens</th><th>ones</th></tr></thead><tbody><tr><td>1</td><td>3</td></tr></tbody></table> <u>13</u>	tens	ones	1	3
tens	ones																
1	5																
tens	ones																
2	2																
tens	ones																
1	3																
7. 	<table border="1"><thead><tr><th>tens</th><th>ones</th></tr></thead><tbody><tr><td>1</td><td>4</td></tr></tbody></table> <u>14</u>	tens	ones	1	4	8. 	<table border="1"><thead><tr><th>tens</th><th>ones</th></tr></thead><tbody><tr><td>1</td><td>6</td></tr></tbody></table> <u>16</u>	tens	ones	1	6	9. 	<table border="1"><thead><tr><th>tens</th><th>ones</th></tr></thead><tbody><tr><td>1</td><td>2</td></tr></tbody></table> <u>12</u>	tens	ones	1	2
tens	ones																
1	4																
tens	ones																
1	6																
tens	ones																
1	2																
10. 	<table border="1"><thead><tr><th>tens</th><th>ones</th></tr></thead><tbody><tr><td>1</td><td>8</td></tr></tbody></table> <u>18</u>	tens	ones	1	8	11. 	<table border="1"><thead><tr><th>tens</th><th>ones</th></tr></thead><tbody><tr><td>1</td><td>9</td></tr></tbody></table> <u>19</u>	tens	ones	1	9	12. 	<table border="1"><thead><tr><th>tens</th><th>ones</th></tr></thead><tbody><tr><td>1</td><td>1</td></tr></tbody></table> <u>11</u>	tens	ones	1	1
tens	ones																
1	8																
tens	ones																
1	9																
tens	ones																
1	1																